

Spelling

Can you write some sentences to describe what is happening in the picture? Remember your capital letters, finger spaces and full stops.



Mental maths and fluency

Circle the number that comes after

34

36

32

Circle the number that comes before
40.

30

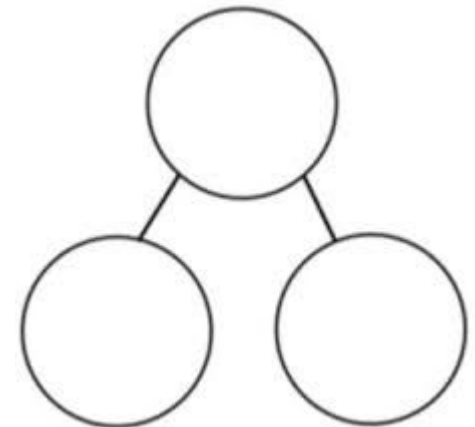
41

39

5a. Maria has 8 lolly pops in total. She gives 3 lolly pops to Nia. She gives the rest of her lolly pops to Sam.

What are the parts?

What is the whole?



Pick a challenge to complete this week.

Geography

Can you go for a walk around Halesowen and make a list of the shops you see?




Art

Can you paint or draw a picture of a type of transport e.g. a car, bus, train or bike?




Science

Can you make a human body model including arms, legs, hands, feet, eyes, ears, mouth and nose?



PSHE

Can you make a poster all about you? What are your favourite hobbies? Your favourite food?



RE

Can you tell someone at home the story of The Lost Son?



PE

Can you practice dribbling a ball with control?



Year 1's
Home Learning

Homework due back on
23.10.23